


Bodies of Water

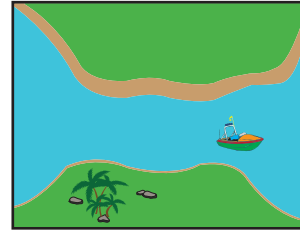
Identify each body of water and check the correct answer.

1)



- river
- lake
- ocean

2)



- canal
- bay
- strait

3)

Preview

Become a member to unlock
unrestricted access to both printable
and online worksheets.



www.tutoringhour.com

5)

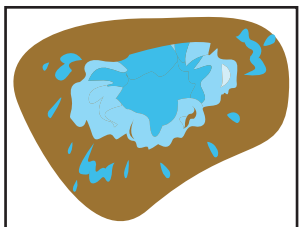


- reservoir




- ocean

7)



- pond
- wetland
- puddle

8)



- waterfall
- wetland
- lake