


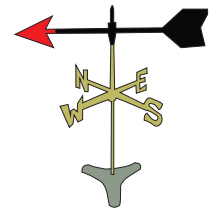
Weather Instruments

Match each description to the correct weather instrument. Write the name of the instrument.

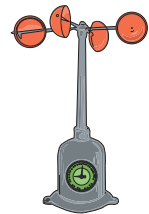
- 1) an instrument for measuring wind speed and wind pressure



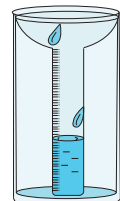
- 2) an instrument for measuring the temperature



- 3) an instrument for measuring atmospheric pressure



- 4) an instrument for showing the direction of the wind



- 5) an instrument for measuring rainfall

