


Measuring Weight | Customary Units

Calculate the weight of each individual object.

1)

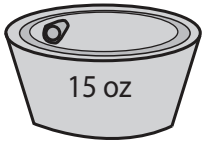


=



Weight of each  = _____ lb

2)

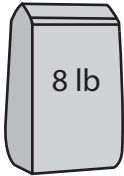


=

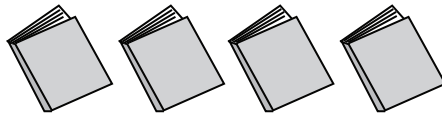


Weight of each  = _____ oz

3)



=



Weight of each  = _____ lb

4)

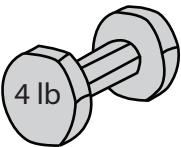


=




Weight of each  = _____ oz

5)

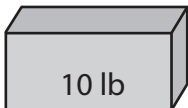


=



Weight of each  = _____ lb

6)

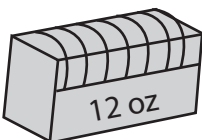


=



Weight of each  = _____ lb

7)



=



Weight of each  = _____ oz