


Identifying Sides and Corners

Write the number of sides and corners in each 2D shape.


1)

Hexagon

Sides: _____

Corners: _____


2)

Diamond

Sides: _____

Corners: _____


3)

Pentagon

Sides: _____

Corners: _____

4)

Triangle

Sides: _____

Corners: _____

5)

Rectangle

Sides: _____

Corners: _____

6)

Square

Sides: _____

Corners: _____