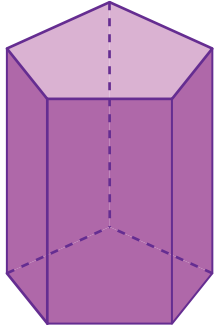


Faces, Edges, and Vertices

Answer Key

Write the number of faces, edges, and vertices and identify each 3D shape.

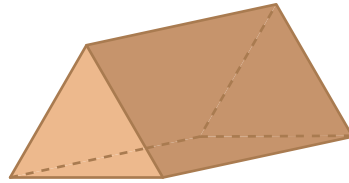
1)



Faces	7
Edges	15
Vertices	10

Name: **Pentagonal prism**

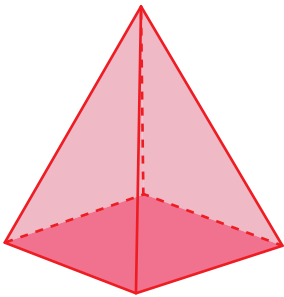
2)



Faces	5
Edges	9
Vertices	6

Name: **Triangular prism**

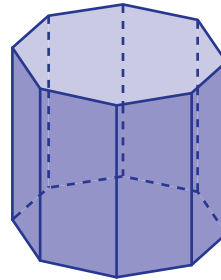
3)



Faces	5
Edges	8
Vertices	5

Name: **Square pyramid**

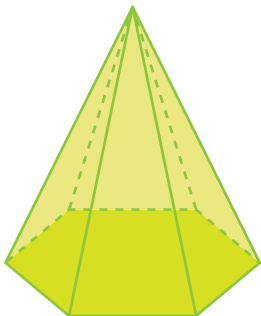
4)



Faces	10
Edges	24
Vertices	16

Name: **Octagonal prism**

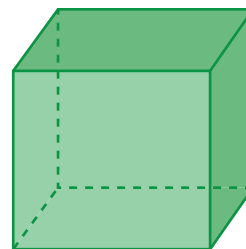
5)



Faces	7
Edges	12
Vertices	7

Name: **Hexagonal pyramid**

6)



Faces	6
Edges	12
Vertices	8

Name: **Cube**