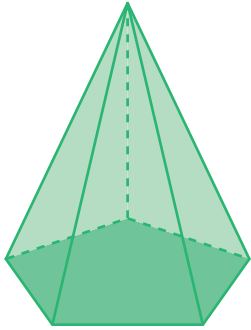


Faces, Edges, and Vertices

Answer Key

Write the number of faces, edges, and vertices and identify each 3D shape.

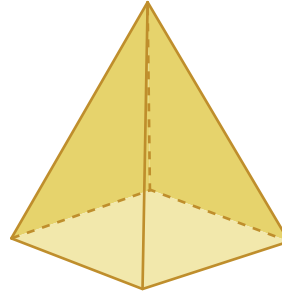
1)



Faces	6
Edges	10
Vertices	6

Name: **Pentagonal pyramid**

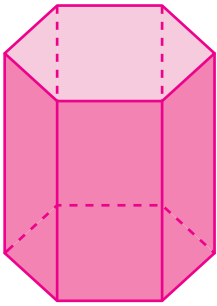
2)



Faces	5
Edges	8
Vertices	5

Name: **Square pyramid**

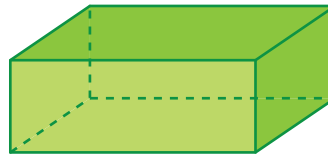
3)



Faces	8
Edges	18
Vertices	12

Name: **Hexagonal prism**

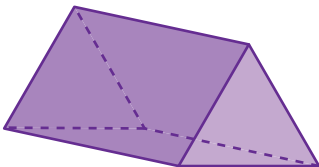
4)



Faces	6
Edges	12
Vertices	8

Name: **Rectangular prism**

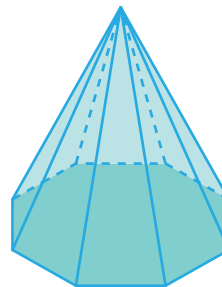
5)



Faces	5
Edges	9
Vertices	6

Name: **Triangular prism**

6)



Faces	9
Edges	16
Vertices	9

Name: **Octagonal pyramid**