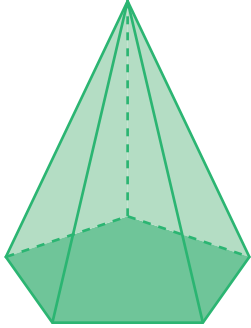


# Faces, Edges, and Vertices

Write the number of faces, edges, and vertices and identify each 3D shape.

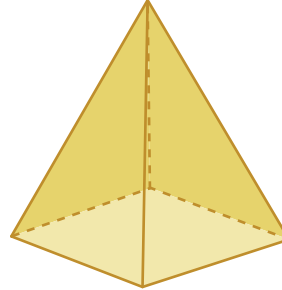
1)



Faces	
Edges	
Vertices	

Name: \_\_\_\_\_

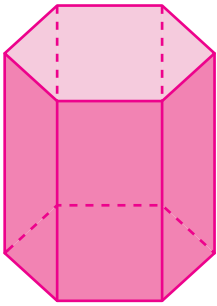
2)



Faces	
Edges	
Vertices	

Name: \_\_\_\_\_

3)



Faces	
Edges	
Vertices	

Name: \_\_\_\_\_

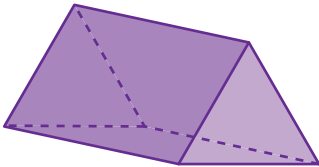
4)



Faces	
Edges	
Vertices	

Name: \_\_\_\_\_

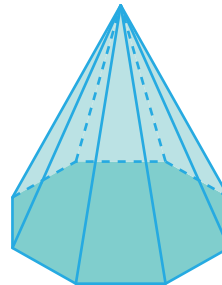
5)



Faces	
Edges	
Vertices	

Name: \_\_\_\_\_

6)



Faces	
Edges	
Vertices	

Name: \_\_\_\_\_