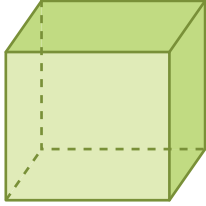


Naming Prisms and Pyramids | MCQ

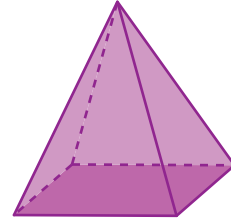
Check the option that describes each prism and pyramid.

1



- Cylinder

2



- Rectangular prism

Preview

Become a member to unlock
unrestricted access to both printable
and online worksheets.



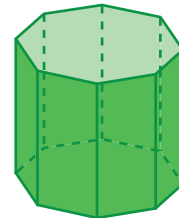
www.tutoringhour.com

5



- Hexagonal prism
 Octagonal prism
 Rectangular prism

6



- Octagonal prism
 Hexagonal prism
 Pentagonal prism