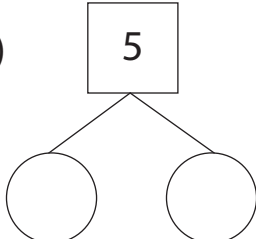


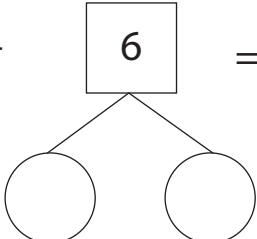
Make Ten and Add

Split up the highlighted number and find the sum using the making 10 addition strategy.

1) $\boxed{5} + 8 = \underline{\quad}$



2) $9 + \boxed{6} = \underline{\quad}$



Preview

Become a member to unlock
unrestricted access to both printable
and online worksheets.

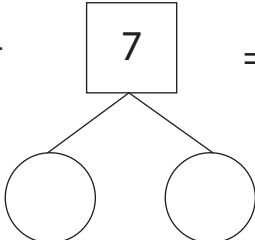


www.tutoringhour.com

3) _____

5) _____

7) $6 + \boxed{7} = \underline{\quad}$



8) $\boxed{8} + 9 = \underline{\quad}$

