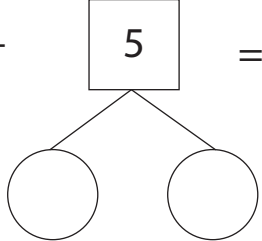


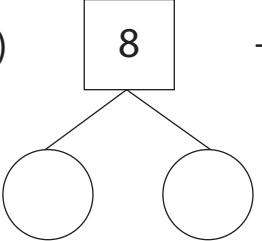
# Make Ten and Add

Split up the highlighted number and find the sum using the making 10 addition strategy.

1)  $6 + \boxed{5} = \underline{\quad}$



2)  $\boxed{8} + 4 = \underline{\quad}$



## Preview

Become a member to unlock  
unrestricted access to both printable  
and online worksheets.

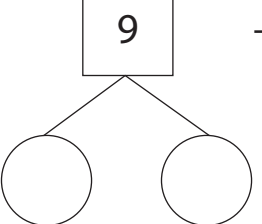


www.tutoringhour.com

3)

5)

7)  $\boxed{9} + 8 = \underline{\quad}$



8)  $7 + \boxed{6} = \underline{\quad}$

