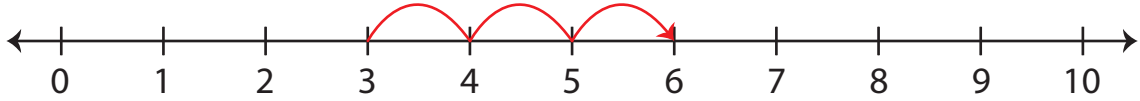


# Number Line Addition | 0 - 10

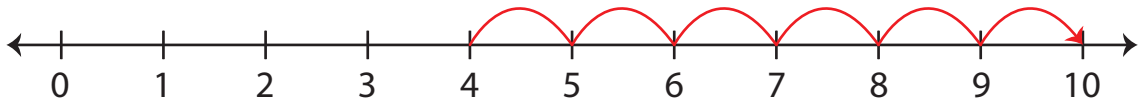
**Answer Key**

Indicate hops on each number line and complete the addition sentences.

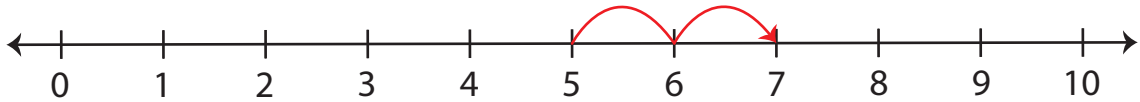
1)  $3 + 3 = \underline{6}$



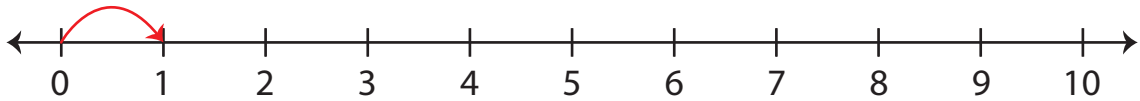
2)  $4 + 6 = \underline{10}$



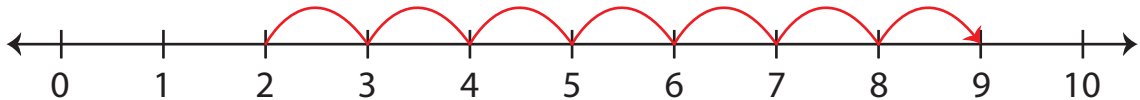
3)  $5 + 2 = \underline{7}$



4)  $0 + 1 = \underline{1}$



5)  $2 + 7 = \underline{9}$



6)  $1 + 5 = \underline{6}$

