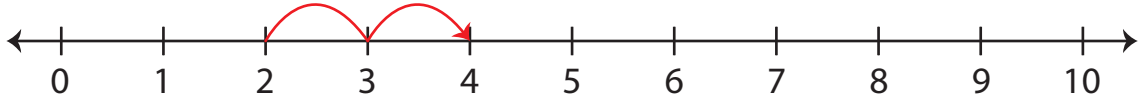


Number Line Addition | 0 - 10

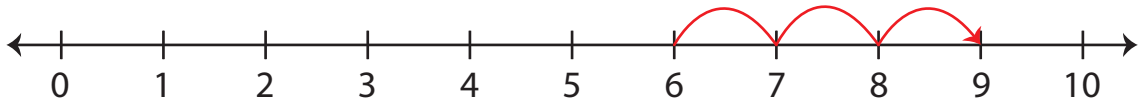
Answer Key

Indicate hops on each number line and complete the addition sentences.

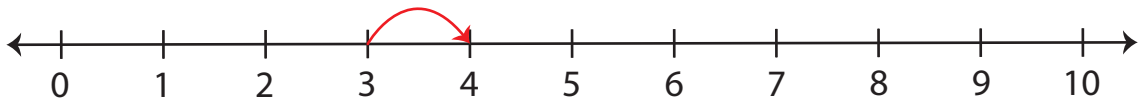
1) $2 + 2 = \underline{4}$



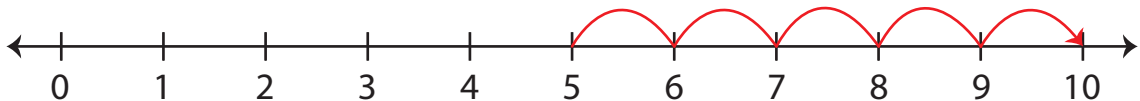
2) $6 + 3 = \underline{9}$



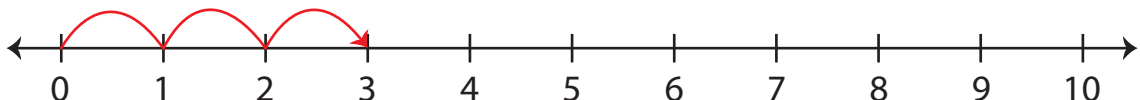
3) $3 + 1 = \underline{4}$



4) $5 + 5 = \underline{10}$



5) $0 + 3 = \underline{3}$



6) $1 + 7 = \underline{8}$

