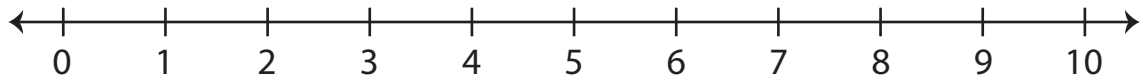


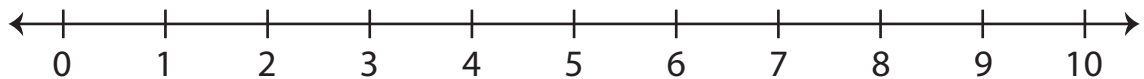
Number Line Addition | 0 - 10

Indicate hops on each number line and complete the addition sentences.

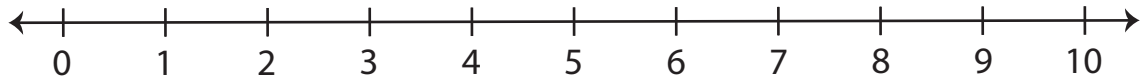
1) $2 + 2 = \underline{\hspace{2cm}}$



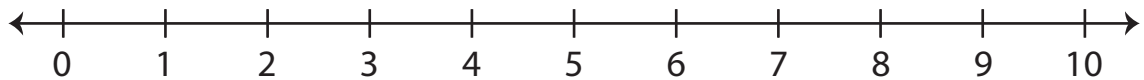
2) $6 + 3 = \underline{\hspace{2cm}}$



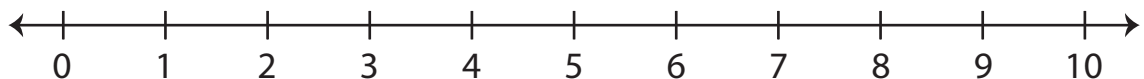
3) $3 + 1 = \underline{\hspace{2cm}}$



4) $5 + 5 = \underline{\hspace{2cm}}$



5) $0 + 3 = \underline{\hspace{2cm}}$



6) $1 + 7 = \underline{\hspace{2cm}}$

