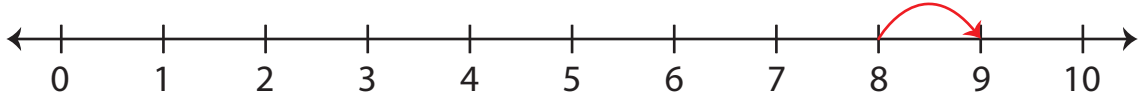


Number Line Addition | 0 - 10

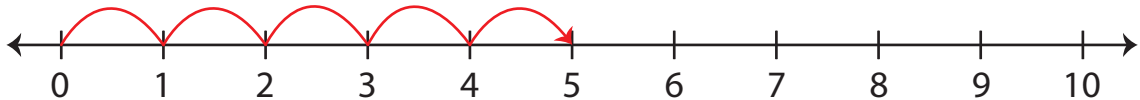
Answer Key

Indicate hops on each number line and complete the addition sentences.

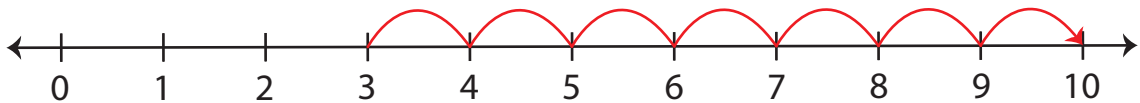
1) $8 + 1 = \underline{9}$



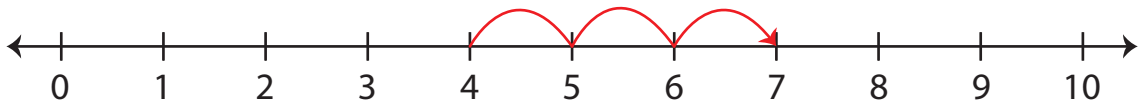
2) $0 + 5 = \underline{5}$



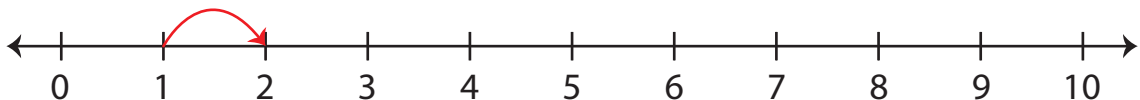
3) $3 + 7 = \underline{10}$



4) $4 + 3 = \underline{7}$



5) $1 + 1 = \underline{2}$



6) $6 + 2 = \underline{8}$

