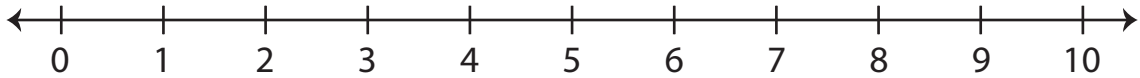


# Number Line Addition | 0 - 10

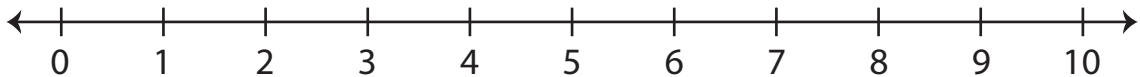
---

Indicate hops on each number line and complete the addition sentences.

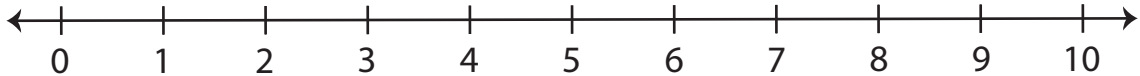
1)  $8 + 1 = \underline{\hspace{2cm}}$



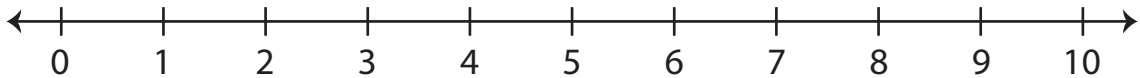
2)  $0 + 5 = \underline{\hspace{2cm}}$



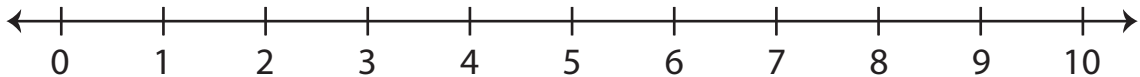
3)  $3 + 7 = \underline{\hspace{2cm}}$



4)  $4 + 3 = \underline{\hspace{2cm}}$



5)  $1 + 1 = \underline{\hspace{2cm}}$



6)  $6 + 2 = \underline{\hspace{2cm}}$

