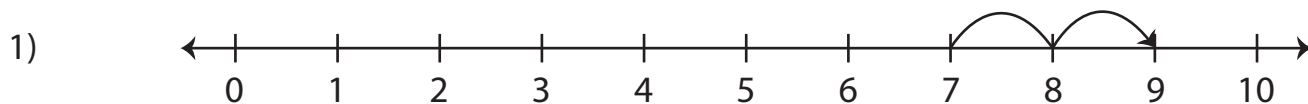


Number Line Addition | 0 - 10

Read each number line and solve the problem.



$$7 + 2 = \underline{\hspace{2cm}}$$

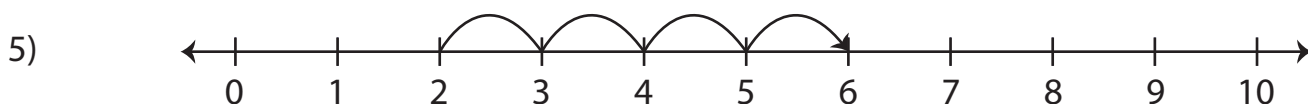


Preview

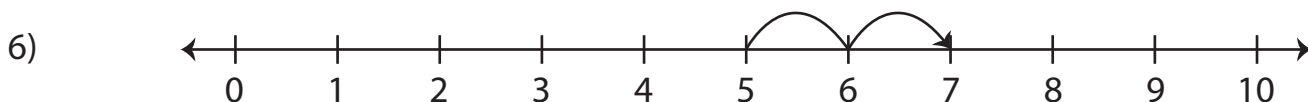
3) **Become a member to unlock**
 4) **unrestricted access to both printable**
 and **online worksheets.**



www.tutoringhour.com



$$2 + 4 = \underline{\hspace{2cm}}$$



$$5 + 2 = \underline{\hspace{2cm}}$$