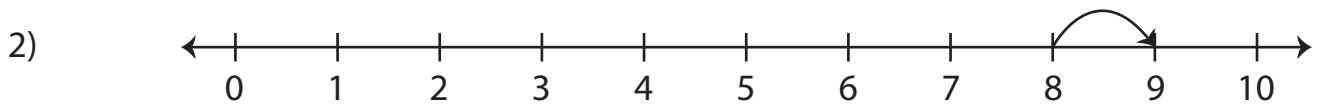


Number Line Addition | 0 - 10

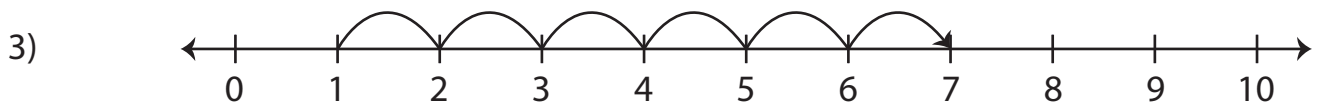
Read each number line and solve the problem.



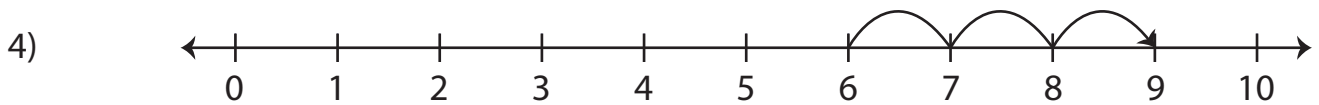
$$0 + 4 = \underline{\hspace{2cm}}$$



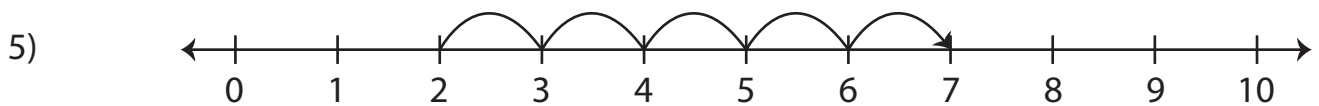
$$8 + 1 = \underline{\hspace{2cm}}$$



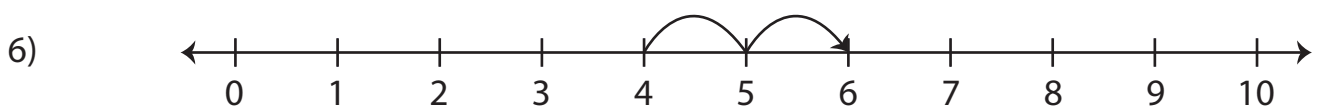
$$1 + 6 = \underline{\hspace{2cm}}$$



$$6 + 3 = \underline{\hspace{2cm}}$$



$$2 + 5 = \underline{\hspace{2cm}}$$



$$4 + 2 = \underline{\hspace{2cm}}$$