
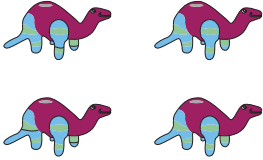


Addition within 10

Answer Key

Count the pictures and write the sum.


1)

 $+$  $=$ 10



2)

 $+$  $=$ 4

3)

 $+$  $=$ 5

4)

 $+$  $=$ 7

5)

 $+$  $=$ 9