



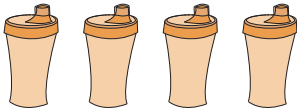

Addition within 10

Count the pictures and write the sum.

1)

 $+$  $=$ _____



2)

 $+$  $=$ _____

3)

 $+$  $=$ _____

4)

 $+$  $=$ _____

5)

 $+$  $=$ _____