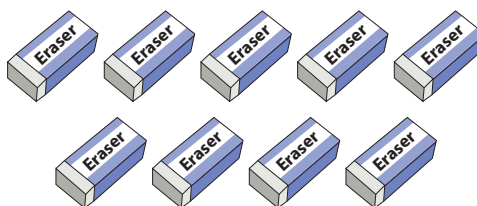
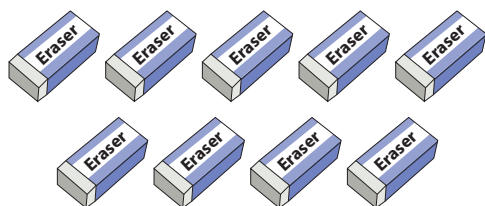


Addition within 20

Count the pictures and write the addition sentence to represent each model.

1)



+

+

=

2)

Preview

Become a member to unlock
unrestricted access to both printable
and online worksheets.



www.tutoringhour.com

3)

4)



+




+

=

5)



+



+

=