

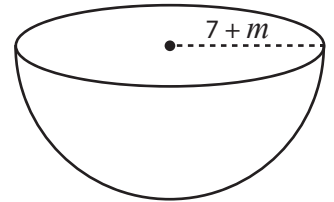
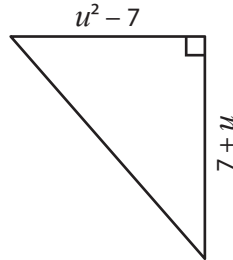
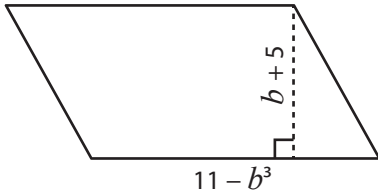
Evaluating Algebraic Expressions | Shapes

Find the measurement.

1) $b = -1$

2) $u = 4$

3) $m = -5$



4)

Preview

Become a member to unlock
unrestricted access to both printable
and online worksheets.

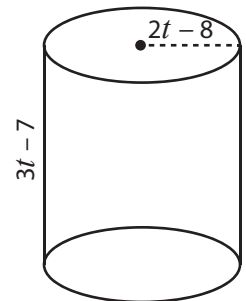
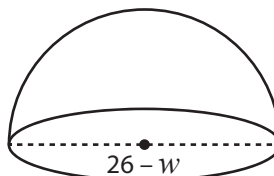
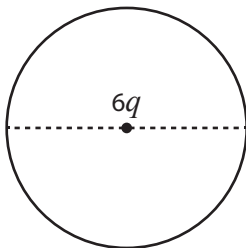


www.tutoringhour.com

7) $q = 1$

8) $w = 8$

9) $t = 6$



Radius = _____

Diameter = _____

Height = _____

Diameter = _____

Radius = _____

Radius = _____