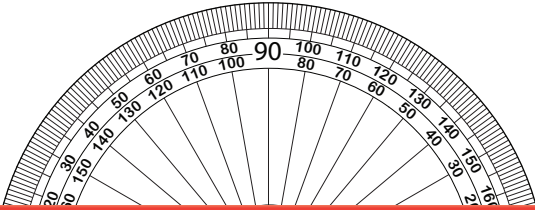


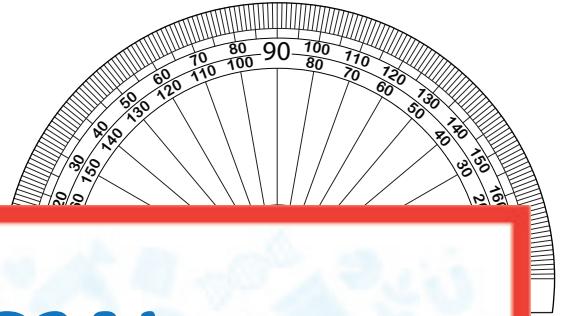
Drawing Angles | Inner and Outer Scales

Draw the other ray on each protractor to create the specified angle.

1) 58°



2) 101°



Preview

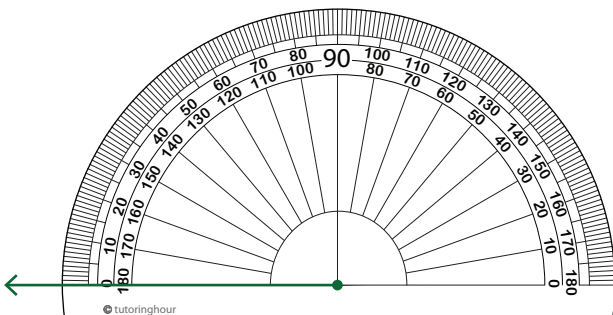
3) 1

Become a member to unlock
unrestricted access to both printable
and online worksheets.

www.tutoringhour.com



5) 79°



6) 122°

