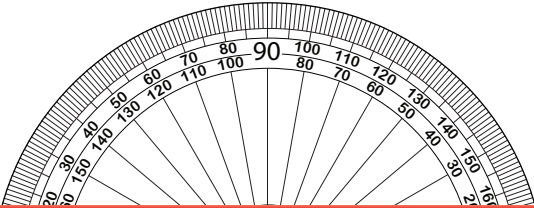


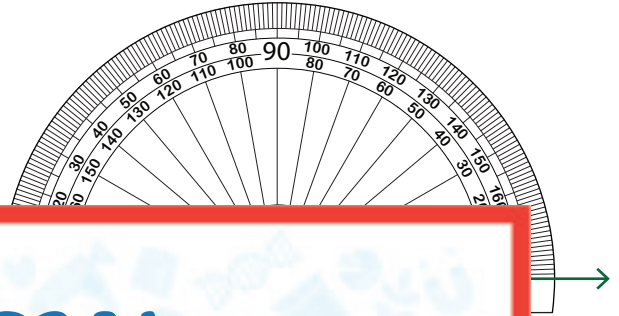
Drawing Angles | 5° Increments

Draw the other ray on each protractor to create the specified angle.

1) 25°



2) 140°



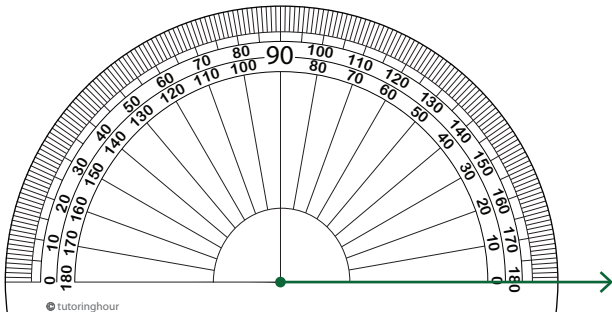
Preview

Become a member to unlock
unrestricted access to both printable
and online worksheets.



www.tutoringhour.com

3) 1



6) 110°

