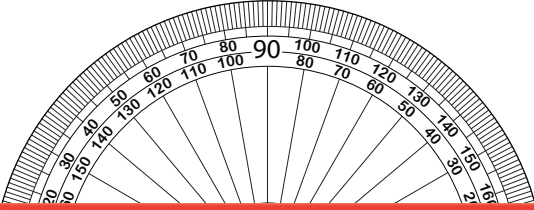


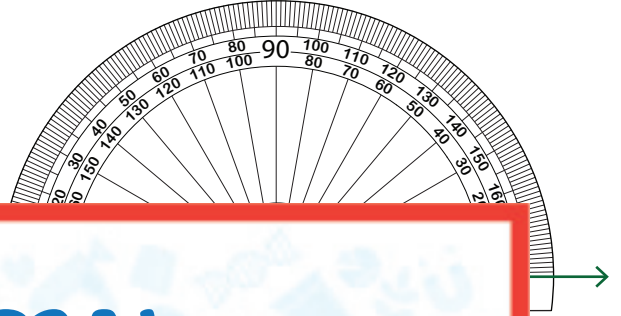
Drawing Angles | 5° Increments

Draw the other ray on each protractor to create the specified angle.

1) 130°



2) 65°



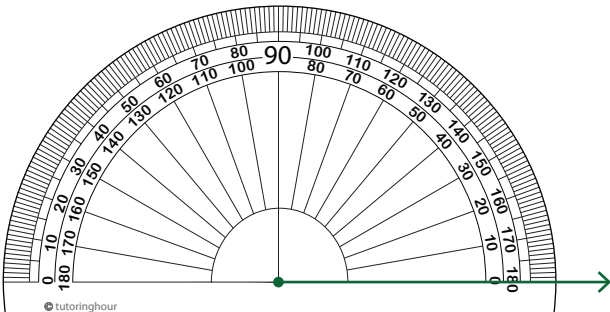
Preview

3) 90°

Become a member to unlock
unrestricted access to both printable
and online worksheets.

www.tutoringhour.com

5) 20°



6) 45°

