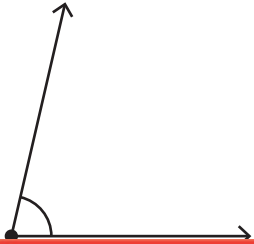


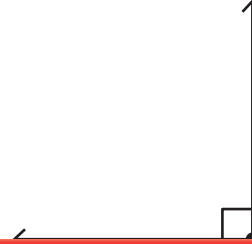
Estimating Angles

Estimate the measure of each angle and check the correct option.

1)


 greater than 90°
 less than 90°
 equal to 90°

2)


 greater than 90°
 less than 90°
 equal to 90°

3)

Preview

Become a member to unlock
unrestricted access to both printable
and online worksheets.



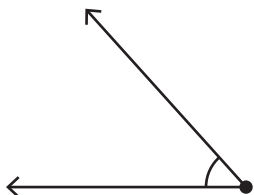
www.tutoringhour.com

5)


 equal to 90°

 equal to 90°

7)


 greater than 90°
 less than 90°
 equal to 90°

8)


 greater than 90°
 less than 90°
 equal to 90°