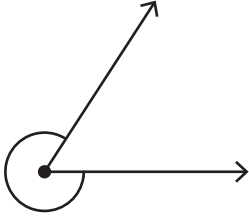


# Estimating Angles

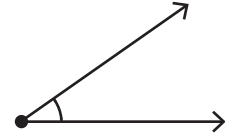
Estimate the measure of each angle and find the exact measure using a protractor.

1)



Estimation: \_\_\_\_\_

2)



Estimation: \_\_\_\_\_

3)

# Preview

Become a member to unlock  
unrestricted access to both printable  
and online worksheets.



[www.tutoringhour.com](http://www.tutoringhour.com)

5)

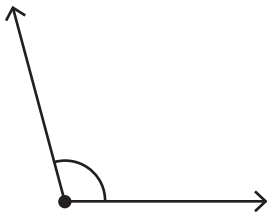
Estimation: \_\_\_\_\_

Estimation: \_\_\_\_\_

Exact measure: \_\_\_\_\_

Exact measure: \_\_\_\_\_

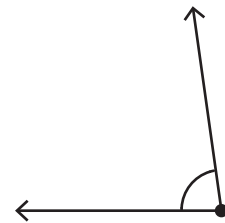
7)



Estimation: \_\_\_\_\_

Exact measure: \_\_\_\_\_

8)



Estimation: \_\_\_\_\_

Exact measure: \_\_\_\_\_