

Estimating Angles

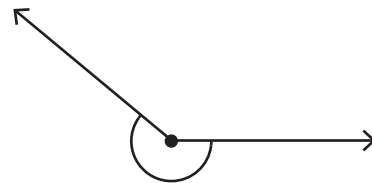
Estimate the measure of each angle and find the exact measure using a protractor.

1)



Estimation: _____

2)



Estimation: _____

3)

Preview

Become a member to unlock
unrestricted access to both printable
and online worksheets.



www.tutoringhour.com

5)

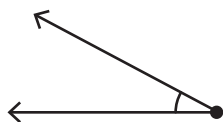
Estimation: _____

Exact measure: _____

Estimation: _____

Exact measure: _____

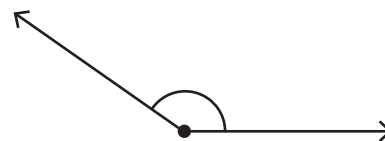
7)



Estimation: _____

Exact measure: _____

8)



Estimation: _____

Exact measure: _____