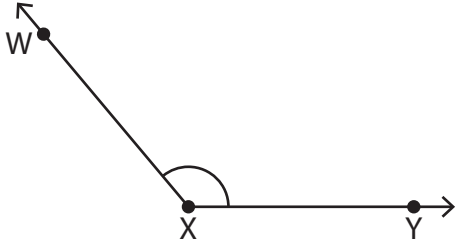


# Measuring Angles | 5° Increments

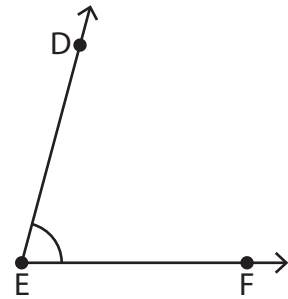
Measure each angle using a protractor.

1)



$$m\angle WXY = \underline{\hspace{2cm}}$$

2)



$$m\angle DEF = \underline{\hspace{2cm}}$$

3)

## Preview

Become a member to unlock  
unrestricted access to both printable  
and online worksheets.



[www.tutoringhour.com](http://www.tutoringhour.com)

5)

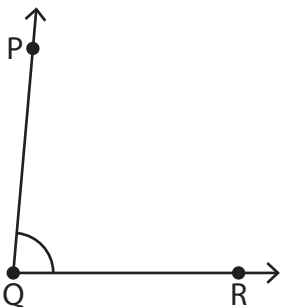
G H

$$m\angle FGH = \underline{\hspace{2cm}}$$

C D

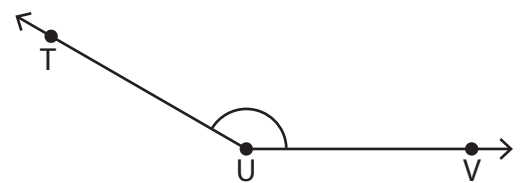
$$m\angle BCD = \underline{\hspace{2cm}}$$

7)



$$m\angle PQR = \underline{\hspace{2cm}}$$

8)



$$m\angle TUV = \underline{\hspace{2cm}}$$