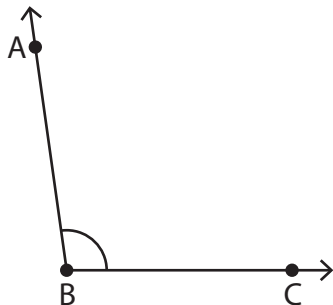


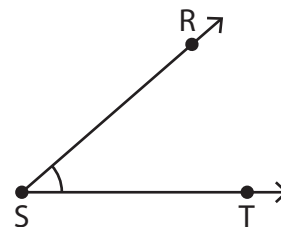
Measuring Angles | 1° Increments

Measure each angle using a protractor.

1)


 $m\angle ABC =$

2)


 $m\angle PST =$

3)

Preview

Become a member to unlock
unrestricted access to both printable
and online worksheets.



www.tutoringhour.com

5)

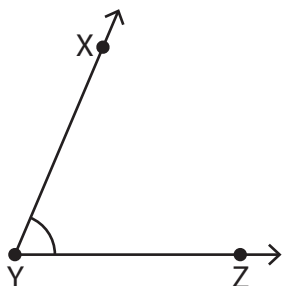
T U

 $m\angle STU =$

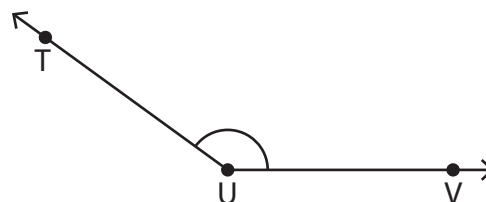
M N

 $m\angle LMN =$

7)


 $m\angle XYZ =$

8)


 $m\angle TUV =$