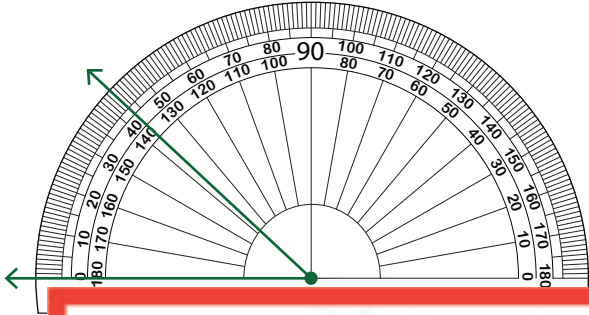


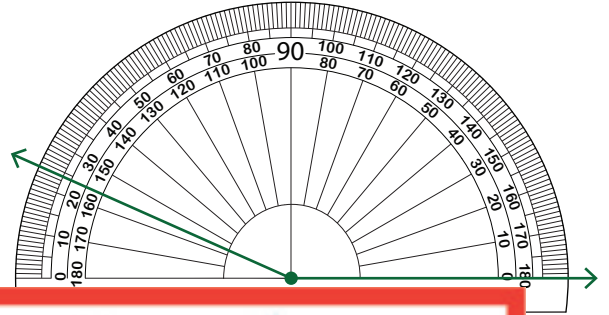
# Reading a Protractor

Read each protractor and write the measure of the angle.

1)



2)

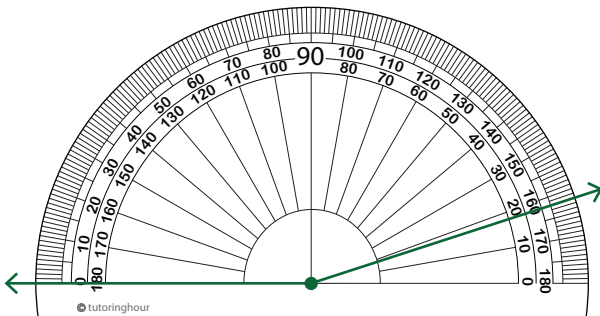


3)

**Become a member to unlock  
unrestricted access to both printable  
and online worksheets.**

[www.tutoringhour.com](http://www.tutoringhour.com)

5)



6)

