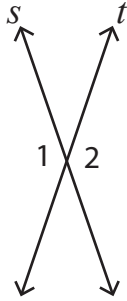


# Pairs of Angles

Answer Key

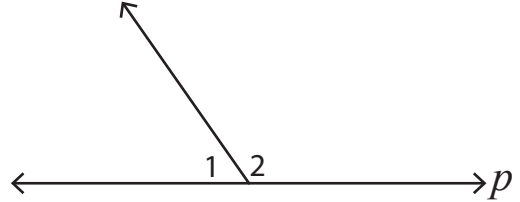
In each figure, identify  $\angle 1$  and  $\angle 2$  as adjacent, vertical, or linear.

1)  $s$  and  $t$  are straight lines.



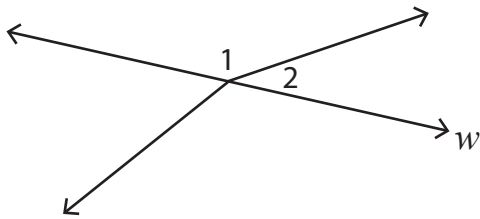
**vertical angles**

2)  $p$  is a straight line.



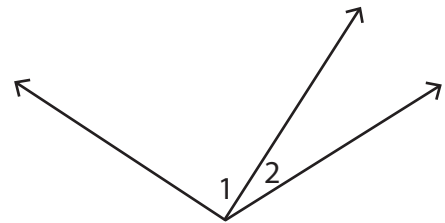
**adjacent and linear angles**

3)  $w$  is a straight line.



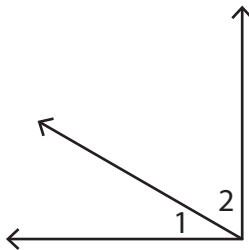
**adjacent and linear angles**

4)



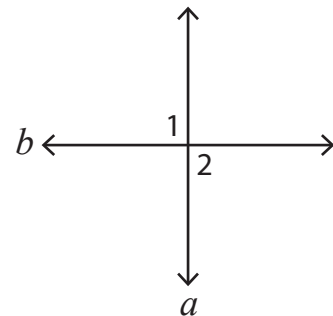
**adjacent angles**

5)



**adjacent angles**

6)  $a$  and  $b$  are straight lines.



**vertical angles**