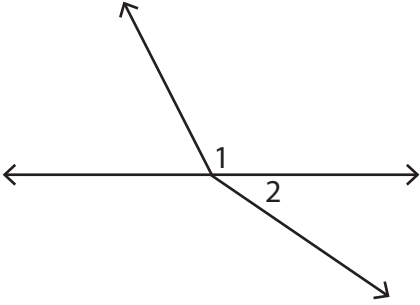


Pairs of Angles

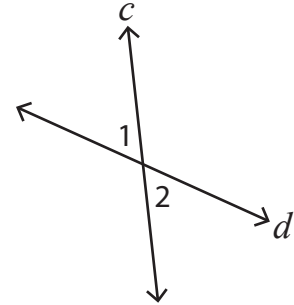
In each figure, identify $\angle 1$ and $\angle 2$ as adjacent, vertical, or linear.

1)



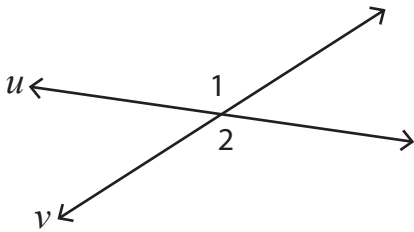
_____.

2) c and d are straight lines.



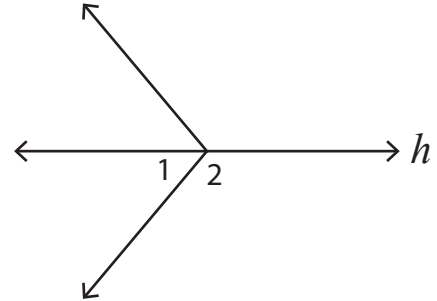
_____.

3) u and v are straight lines.



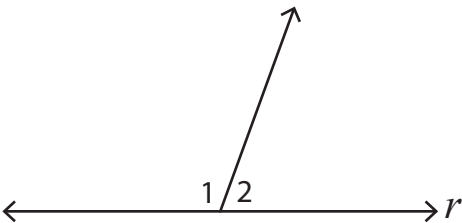
_____.

4) h is a straight line.



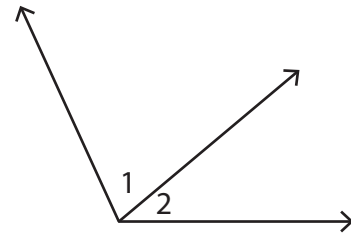
_____.

5) r is a straight line.



_____.

6)



_____.