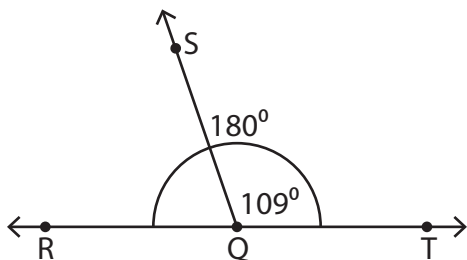


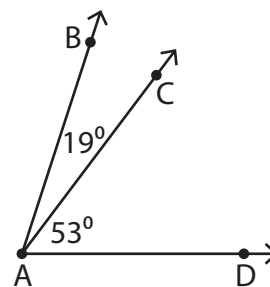
Adjacent Angles

Find the value of x in each figure.

1)



2)



3)

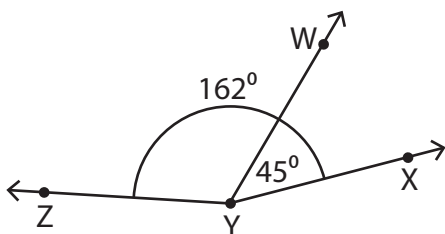
Preview

Become a member to unlock
unrestricted access to both printable
and online worksheets.



www.tutoringhour.com

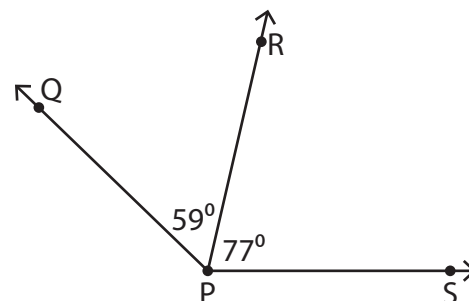
5)



$$m\angle ZYW = (4x - 3)^\circ$$

$$x = \underline{\hspace{2cm}}$$

6)



$$m\angle QPS = (5x - 4)^\circ$$

$$x = \underline{\hspace{2cm}}$$