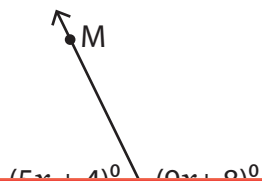


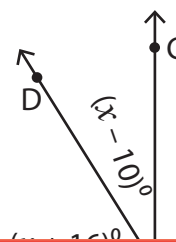
## Complementary & Supplementary Angles

Find the measures of the angles in each pair of complementary or supplementary angles.

1)



2)



# Preview

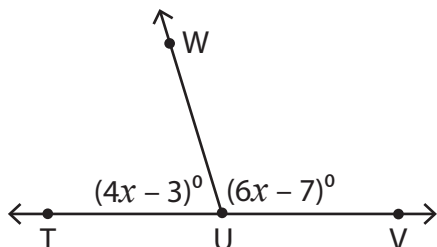
Become a member to unlock  
unrestricted access to both printable  
and online worksheets.



www.tutoringhour.com

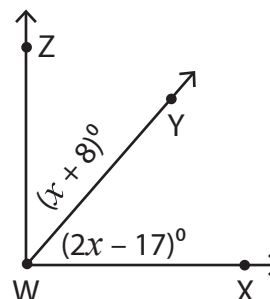
3)

5)



$$m\angle VUW = \underline{\hspace{2cm}}, m\angle WUT = \underline{\hspace{2cm}}$$

6)



$$m\angle ZWY = \underline{\hspace{2cm}}, m\angle YWX = \underline{\hspace{2cm}}$$