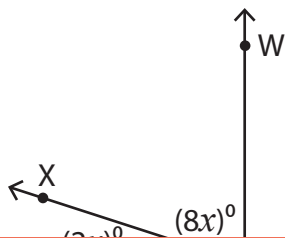


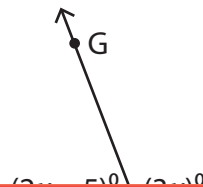
## Complementary & Supplementary Angles

Find the measures of the angles in each pair of complementary or supplementary angles.

1)



2)



# Preview

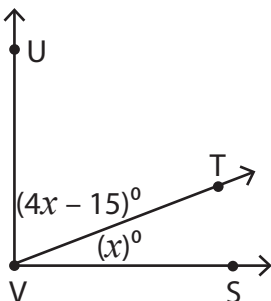
Become a member to unlock  
unrestricted access to both printable  
and online worksheets.



www.tutoringhour.com

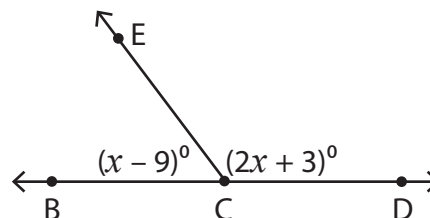
3)

5)



$m\angle SVT = \underline{\hspace{2cm}}$ ,  $m\angle UVT = \underline{\hspace{2cm}}$

6)



$m\angle BCE = \underline{\hspace{2cm}}$ ,  $m\angle ECD = \underline{\hspace{2cm}}$