

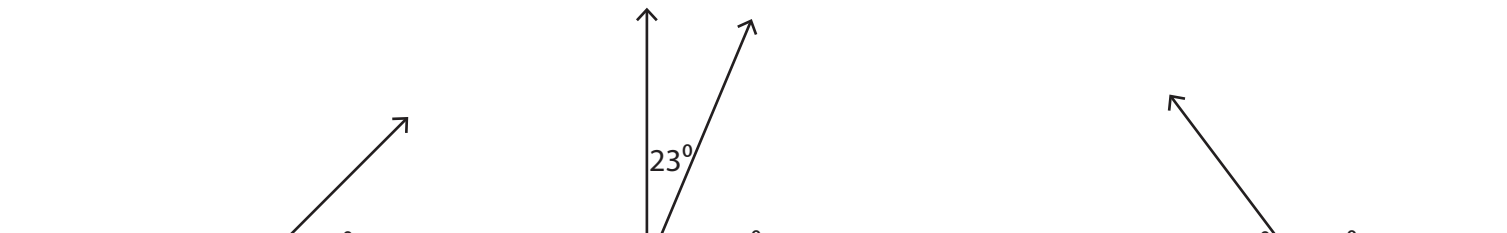
Complementary & Supplementary Angles

Find the value of x in each pair of complementary or supplementary angles.

1)

2)

3)



Preview

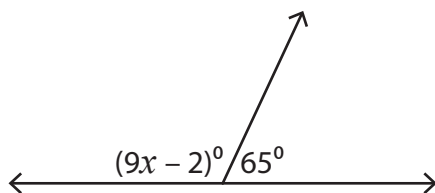
4)

Become a member to unlock
unrestricted access to both printable
and online worksheets.



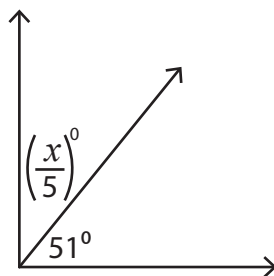
www.tutoringhour.com

7)



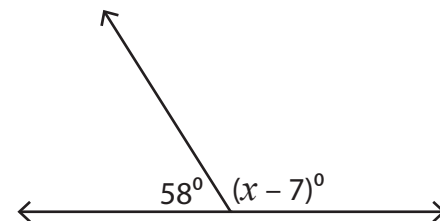
$x =$ _____

8)



$x =$ _____

9)



$x =$ _____