

# Complementary & Supplementary Angles

1) Find the pair of angles that are supplementary.

- a)  $92^\circ, 54^\circ$       b)  $22^\circ, 88^\circ$       c)  $171^\circ, 23^\circ$       d)  $164^\circ, 16^\circ$

2) Which of the following is a complement of  $72^\circ$ ?

3) V


4) F

a

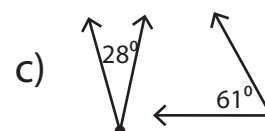
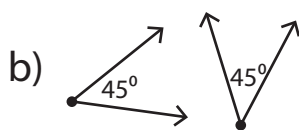
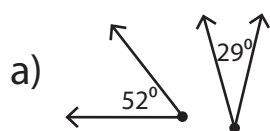
## Preview

Become a member to unlock  
unrestricted access to both printable  
and online worksheets.

www.tutoringhour.com



5) Which of the following is a pair of complementary angles?



6) Which of the following is a supplement of  $122^\circ$ ?

- a)  $58^\circ$       b)  $38^\circ$       c)  $28^\circ$       d)  $48^\circ$