

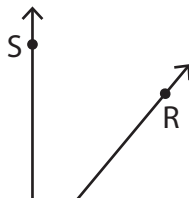
## Complementary & Supplementary Angles

Determine the measure of the unknown angle in each pair of complementary or supplementary angles.

1)



2)



3)



4)

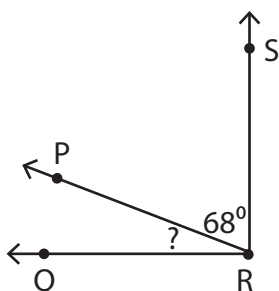
# Preview

Become a member to unlock  
unrestricted access to both printable  
and online worksheets.



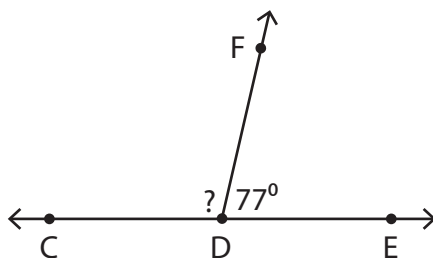
www.tutoringhour.com

7)



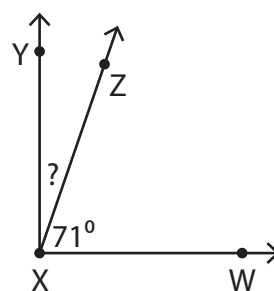
$$m\angle PRQ = \underline{\hspace{2cm}}$$

8)



$$m\angle CDF = \underline{\hspace{2cm}}$$

9)



$$m\angle YXZ = \underline{\hspace{2cm}}$$