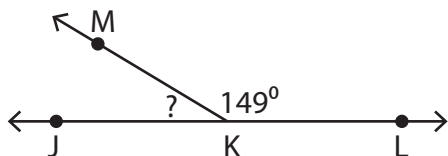


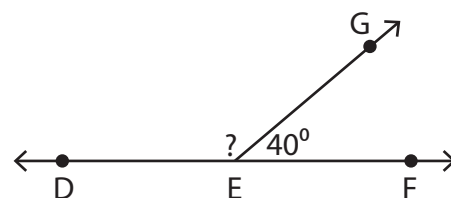
# Linear Pair

Find the measure of the unknown angle in each linear pair of angles.

1)



2)



3)

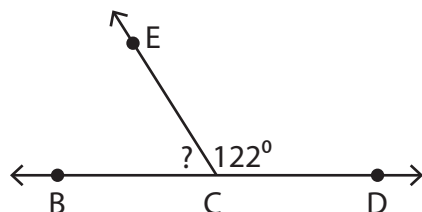
## Preview

Become a member to unlock  
unrestricted access to both printable  
and online worksheets.



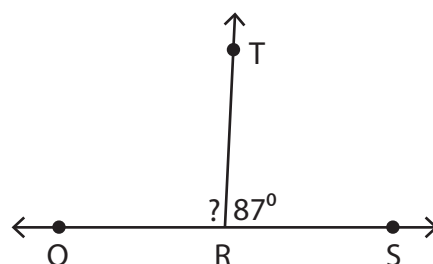
[www.tutoringhour.com](http://www.tutoringhour.com)

5)



$$m\angle BCE = \underline{\hspace{2cm}}$$

6)



$$m\angle QRT = \underline{\hspace{2cm}}$$