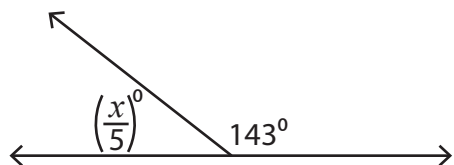


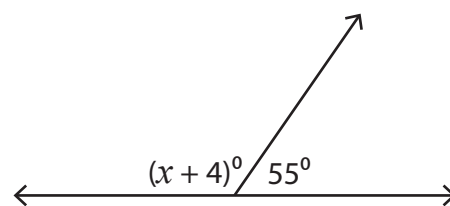
## Supplementary Angles

Find the value of  $x$  in each pair of supplementary angles.

1)



2)



3)

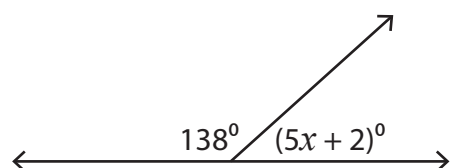
# Preview

Become a member to unlock  
unrestricted access to both printable  
and online worksheets.



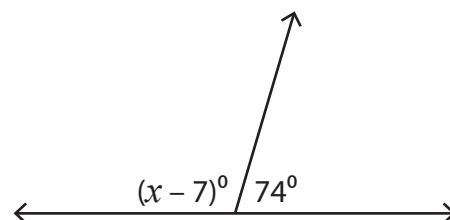
[www.tutoringhour.com](http://www.tutoringhour.com)

5)



$x =$  \_\_\_\_\_

6)



$x =$  \_\_\_\_\_