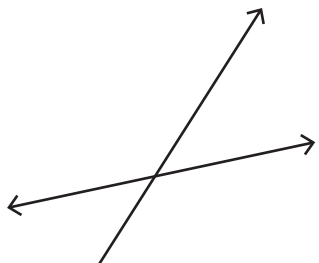


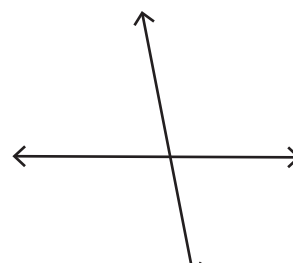
Vertical Angles

A) Mark the vertically opposite angles in each pair of intersecting lines.

1)



2)

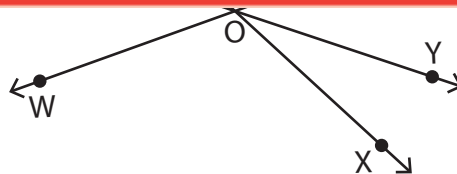


Preview

Become a member to unlock
unrestricted access to both printable
and online worksheets.



www.tutoringhour.com



1) $\angle ZOX$: _____

2) $\angle WOY$: _____

3) $\angle VOW$: _____

4) $\angle VOX$: _____

5) $\angle XOY$: _____

6) $\angle UOZ$: _____