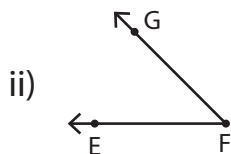
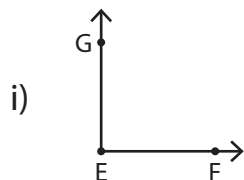


# Parts of an Angle

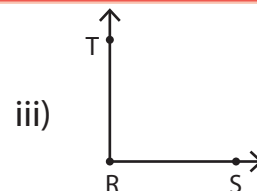
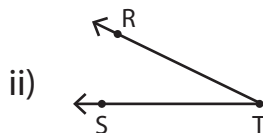
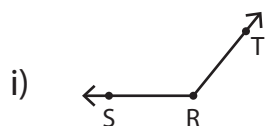
1) Find the angle with the arms  $\overrightarrow{FE}$  and  $\overrightarrow{FG}$ .



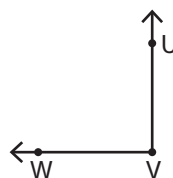
2)

3)

4)



5) Which of the following is the vertex of the angle?



i) U

ii) V

iii) W