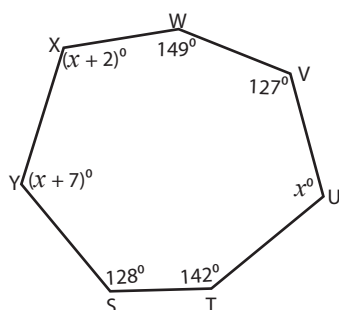


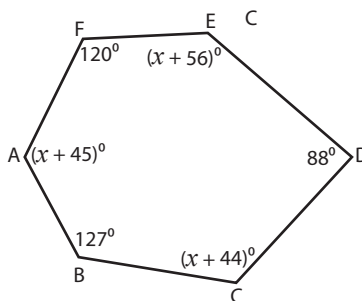
Angles in Polygons

Find the measures of the indicated angles.

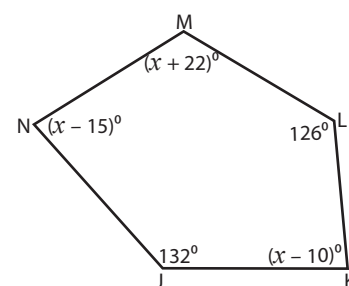
1)



2)



3)



Sum

 x $m\angle$

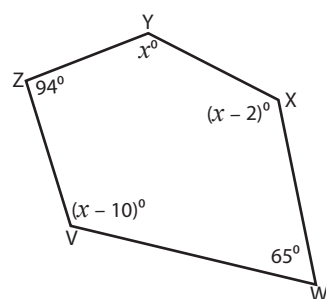
4)

U

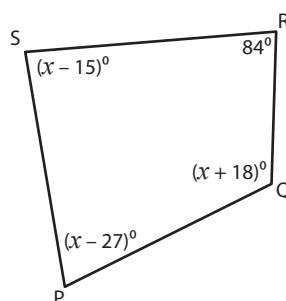
Sum

 x $m\angle$

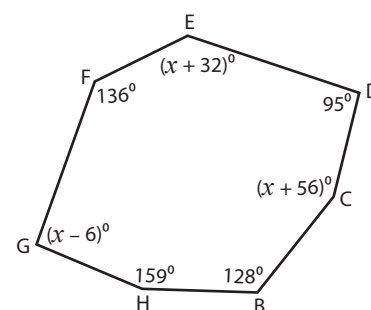
7)



8)



9)



Sum of the interior angles = _____

 $x =$ _____ ; $m\angle V =$ _____ ; $m\angle X =$ _____ ; $m\angle Y =$ _____

Sum of the interior angles = _____

 $x =$ _____ ; $m\angle P =$ _____ ; $m\angle S =$ _____ ; $m\angle Q =$ _____

Sum of the interior angles = _____

 $x =$ _____ ; $m\angle E =$ _____ ; $m\angle C =$ _____ ; $m\angle G =$ _____

Preview

Become a member to unlock
unrestricted access to both printable
and online worksheets.

www.tutoringhour.com

