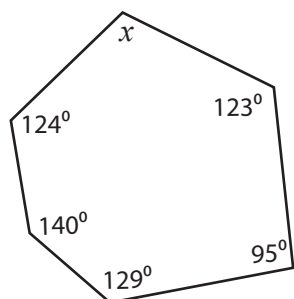


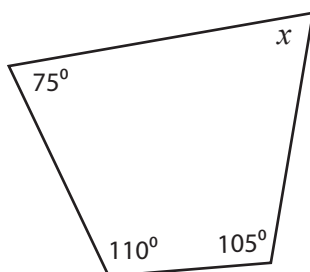
Angles in Polygons

Find the value of x .

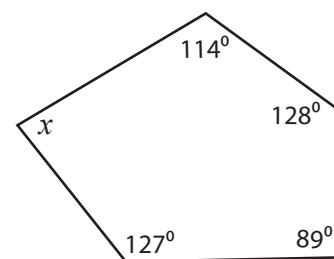
1)



2)



3)



Sum o

Preview

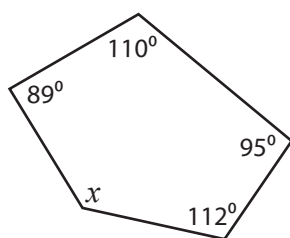
4)

Become a member to unlock
unrestricted access to both printable
and online worksheets.

Sum o

www.tutoringhour.com

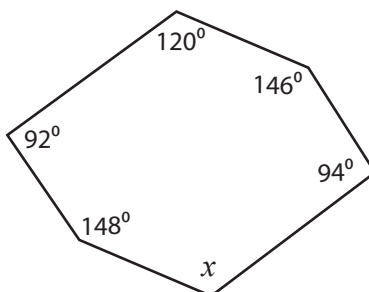
7)



Sum of the interior angles = _____

$x =$ _____

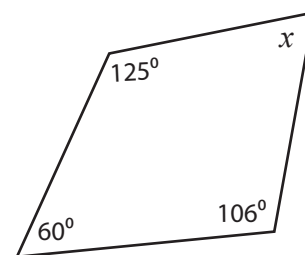
8)



Sum of the interior angles = _____

$x =$ _____

9)



Sum of the interior angles = _____

$x =$ _____