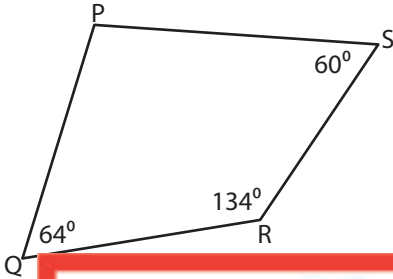


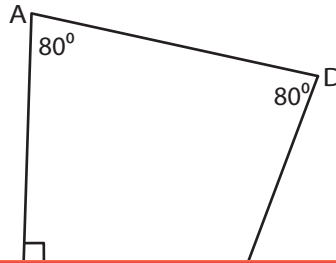
# Angles in a Quadrilaterals

Find the measure of the indicated angle in each quadrilateral.

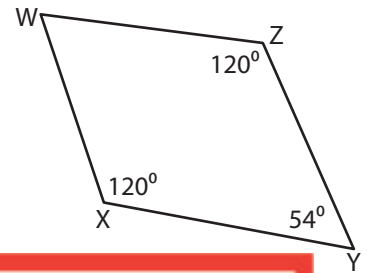
1)



2)



3)



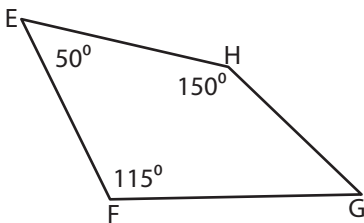
4)

## Preview

Become a member to unlock  
unrestricted access to both printable  
and online worksheets.

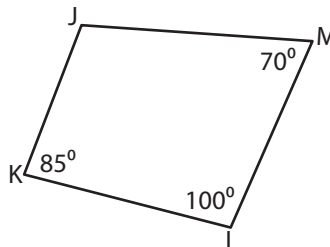
www.tutoringhour.com

7)



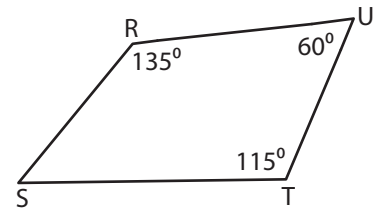
$$m\angle G = \underline{\hspace{2cm}}$$

8)



$$m\angle J = \underline{\hspace{2cm}}$$

9)



$$m\angle S = \underline{\hspace{2cm}}$$