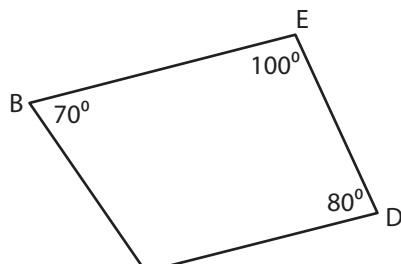


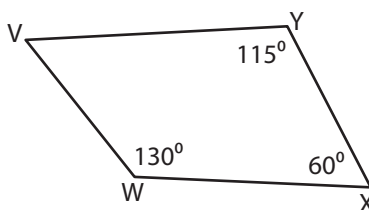
Angles in a Quadrilaterals

Find the measure of the indicated angle in each quadrilateral.

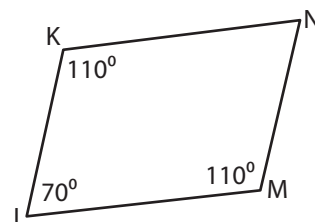
1)



2)



3)



4)

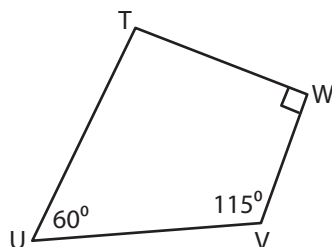
Preview

Become a member to unlock
unrestricted access to both printable
and online worksheets.



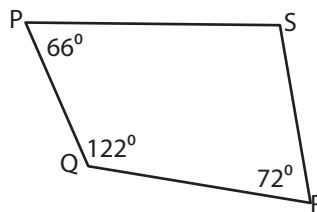
www.tutoringhour.com

7)



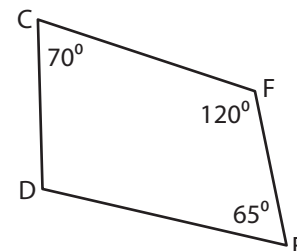
$$m\angle T = \underline{\hspace{2cm}}$$

8)



$$m\angle S = \underline{\hspace{2cm}}$$

9)



$$m\angle D = \underline{\hspace{2cm}}$$