



# Types of Angles

Identify the type of angle formed by the hands of each clock as acute, right, obtuse, straight, reflex, or complete.

1)



2)



3)


# Preview

**Become a member to unlock  
unrestricted access to both printable  
and online worksheets.**




[www.tutoringhour.com](http://www.tutoringhour.com)

5)



\_\_\_\_\_

6)



\_\_\_\_\_