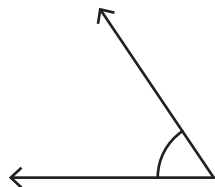


Classifying Angles

Answer Key

Identify each angle as acute, right, obtuse, straight, or reflex.

1)



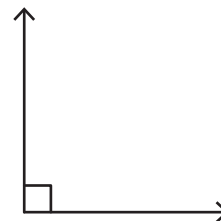
Acute angle

2)



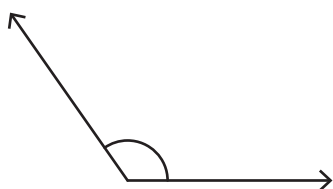
Straight angle

3)



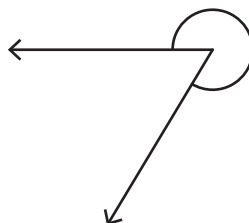
Right angle

4)



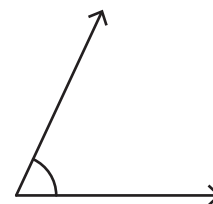
Obtuse angle

5)



Reflex angle

6)



Acute angle

7) 90°

Right angle

8) 166°

Obtuse angle

9) 81°

Acute angle

10) 225°

Reflex angle

11) 47°

Acute angle

12) 108°

Obtuse angle