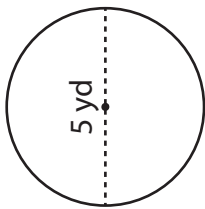


Area of a Circle

Answer Key

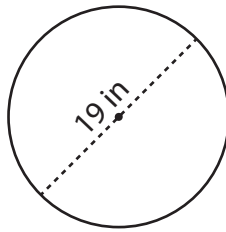
Find the area of each circle. Round your answer to two decimal places.
(Use 3.14 for π .)

1)



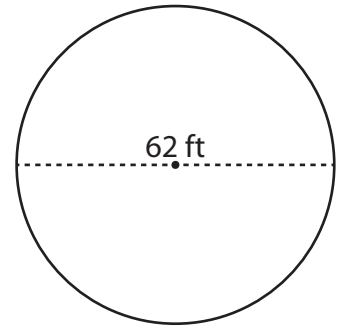
19.63 yd²

2)



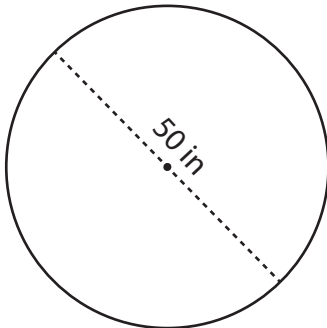
283.39 in²

3)



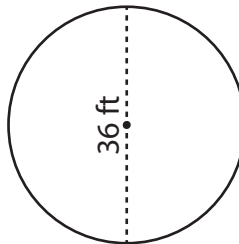
3,017.54 ft²

4)



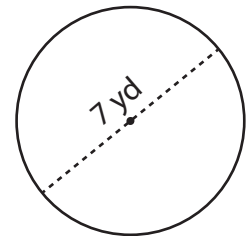
1,962.5 in²

5)



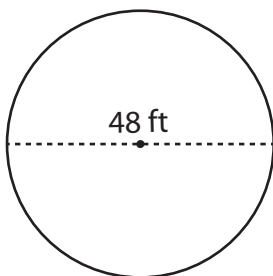
1,017.36 ft²

6)



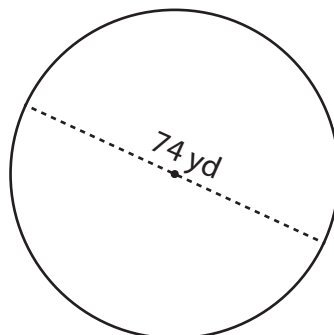
38.47 yd²

7)



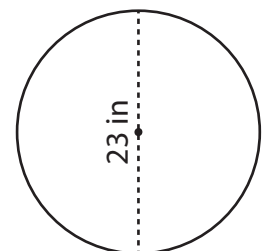
1,808.64 ft²

8)



4,298.66 yd²

9)



415.27 in²