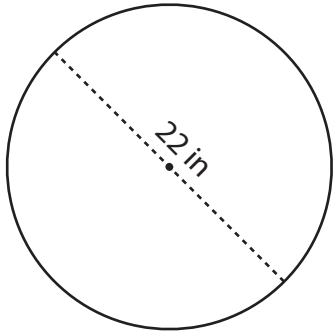


Area of a Circle

Answer Key

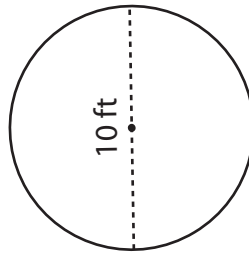
Find the area of each circle. Round your answer to two decimal places.
(Use 3.14 for π .)

1)



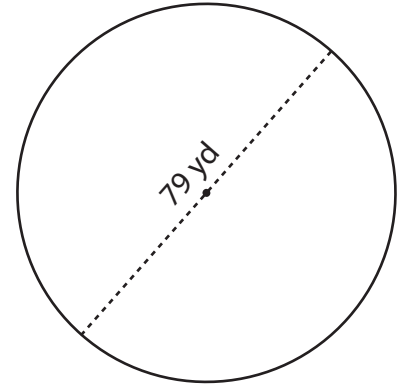
379.94 in²

2)



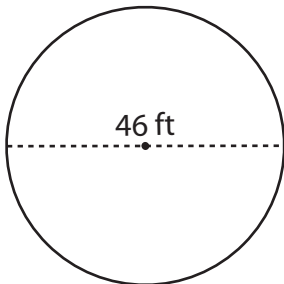
78.5 ft²

3)



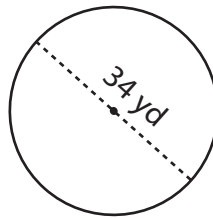
4,899.19 yd²

4)



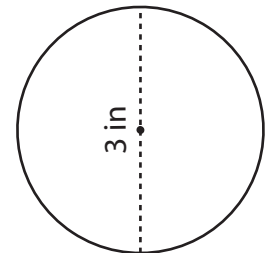
1,661.06 ft²

5)



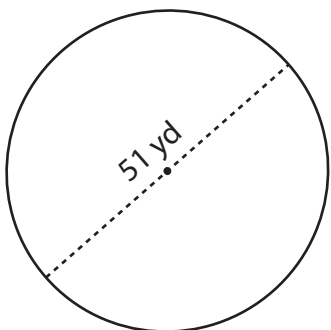
907.46 yd²

6)



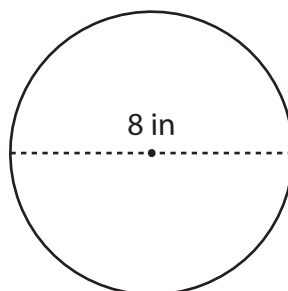
7.07 in²

7)



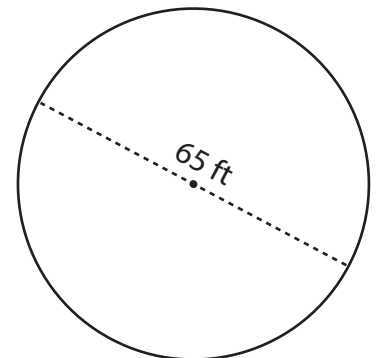
2,041.79 yd²

8)



50.24 in²

9)



3,316.63 ft²